

Name _____

More or Less?

Count the set of things on each row. Color the set that is more.






2



3



2



4



2



1



4



3