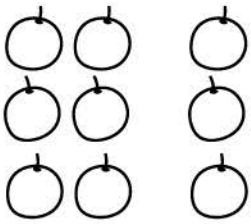


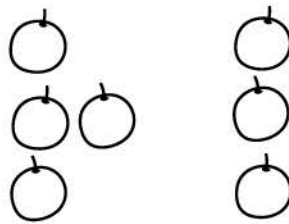
Name _____

Addition


Count, add and write.




$$6 + 3 = \square$$



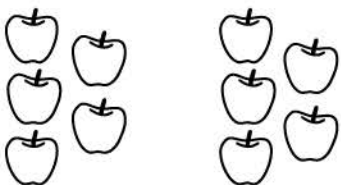
$$4 + 3 = \square$$



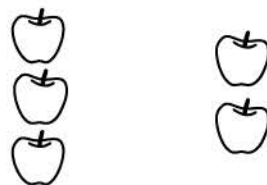
$$2 + 7 = \square$$



$$3 + 3 = \square$$



$$5 + 5 = \square$$



$$3 + 2 = \square$$