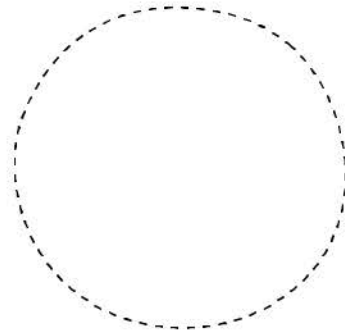
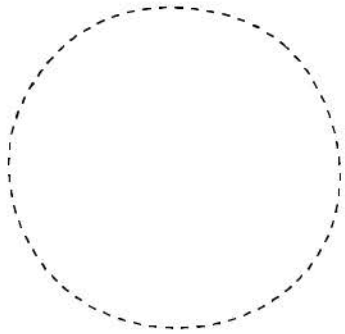


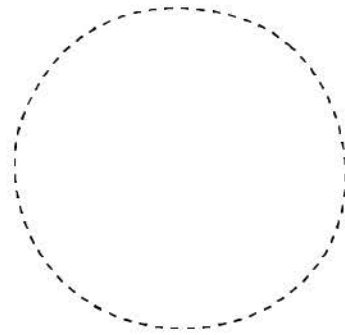
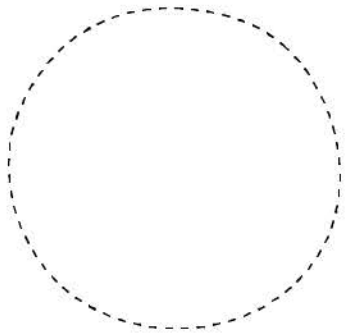
Name _____

How many chocolate chips?

Cut out the cookies. Count the chips on them. Add and write the sum.



$$2 + 5 = \underline{\quad}$$



$$6 + 4 = \underline{\quad}$$

preschool365.com

