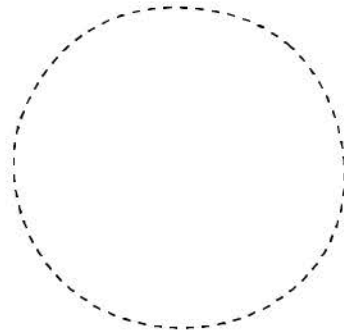
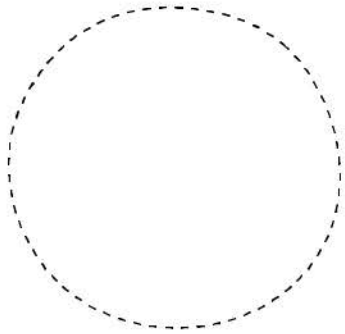


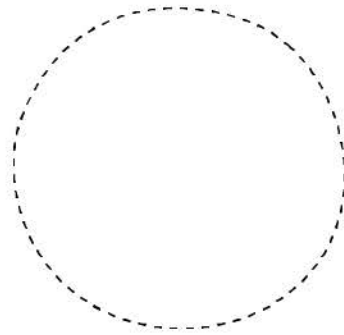
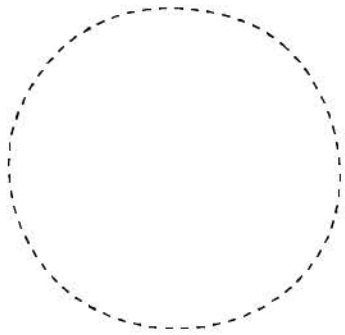
Name _____

How many chocolate chips?

Cut out the cookies. Count the chips on them. Add and write the sum.



$$2 + 1 = \underline{\quad}$$



$$3 + 2 = \underline{\quad}$$

preschool365.com

