



Name _____




ROLL AND ADD

Roll two dice. Draw the dots.


Add the numbers and write the sum.




$$\square + \square = \underline{\quad}$$



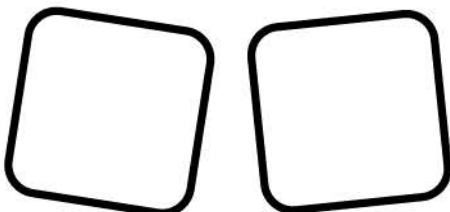
$$\square + \square = \underline{\quad}$$



$$\square + \square = \underline{\quad}$$



$$\square + \square = \underline{\quad}$$



$$\square + \square = \underline{\quad}$$