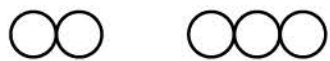


Name \_\_\_\_\_

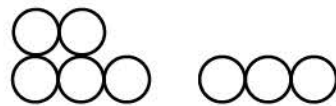
Find the sum.

Count and add the circles. Write the sum.

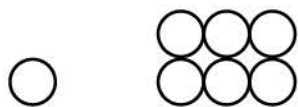
Example



$$2 + 3 = \underline{5}$$



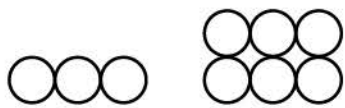
$$5 + 3 = \underline{\quad}$$



$$1 + 6 = \underline{\quad}$$



$$2 + 1 = \underline{\quad}$$



$$3 + 6 = \underline{\quad}$$



$$4 + 4 = \underline{\quad}$$



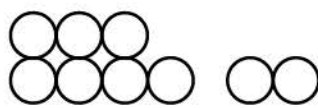
$$7 + 2 = \underline{\quad}$$



$$5 + 2 = \underline{\quad}$$



$$2 + 4 = \underline{\quad}$$



$$7 + 2 = \underline{\quad}$$