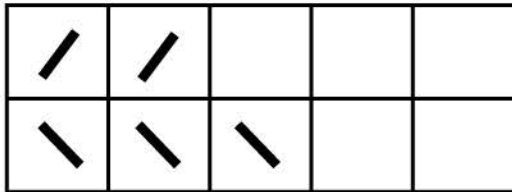


Name _____

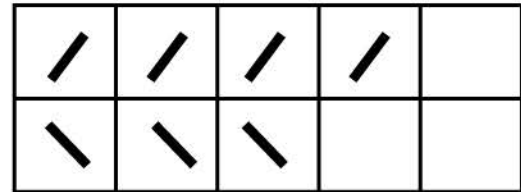
Find the sum.

Count the tally marks. Add them and write the sum.

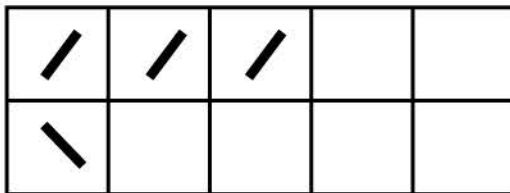
Example



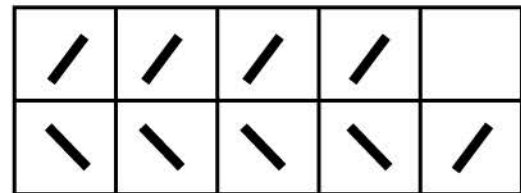
$$2 + 3 = 5$$



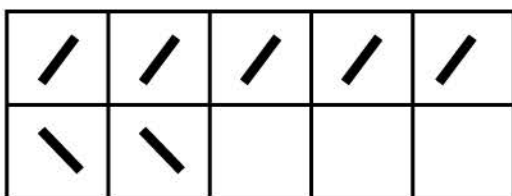
$$4 + 3 =$$



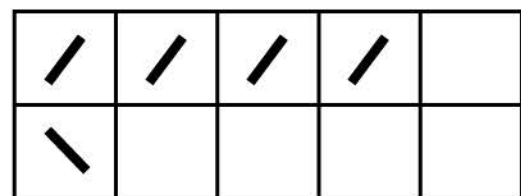
$$3 + 1 =$$



$$4 + 5 =$$



$$5 + 2 =$$



$$4 + 1 =$$