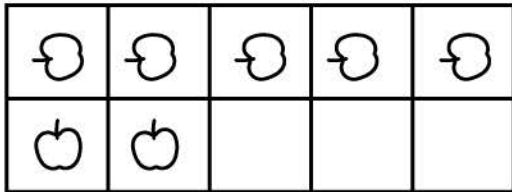


Name _____

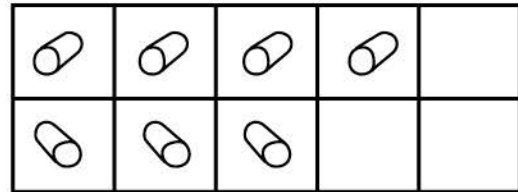
Find the sum.

Count the pictures. Add them and write the sum.

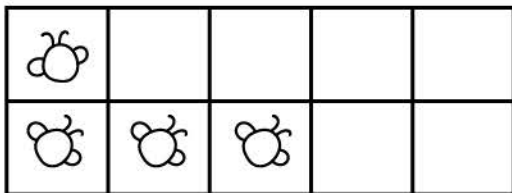
Example



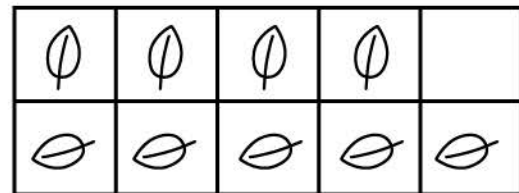
$$5 + 2 = 7$$




$$4 + 3 =$$



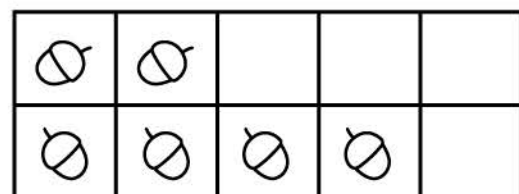
$$1 + 3 =$$



$$4 + 5 =$$



$$5 + 2 =$$



$$2 + 4 =$$