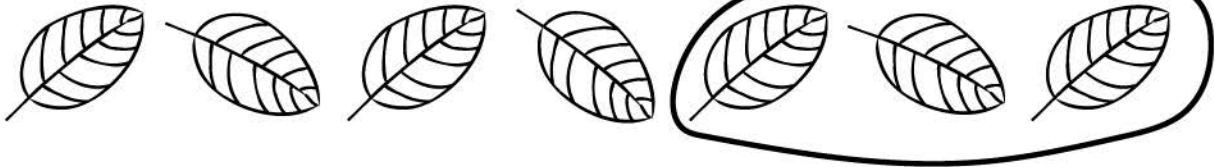


Name _____



Take away

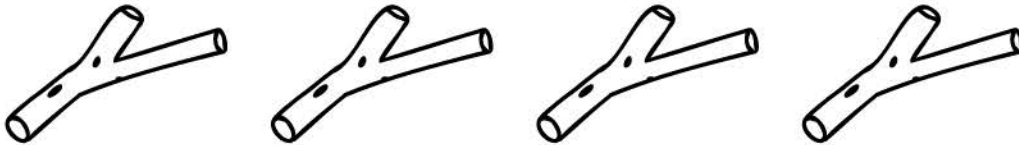
Count the items, Take away, and write how many is left.




$$7 - 3 = \underline{\quad}$$



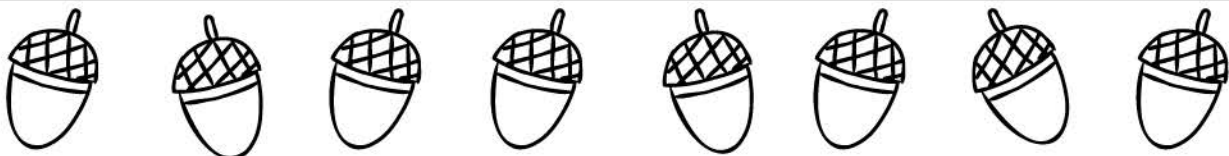
$$5 - 4 = \underline{\quad}$$



$$4 - 2 = \underline{\quad}$$



$$6 - 1 = \underline{\quad}$$



$$8 - 2 = \underline{\quad}$$