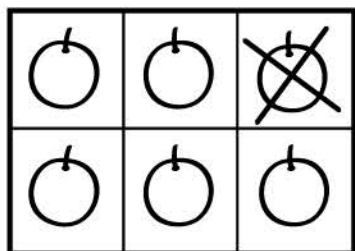


Name _____

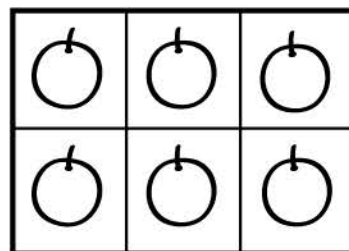


Subtraction

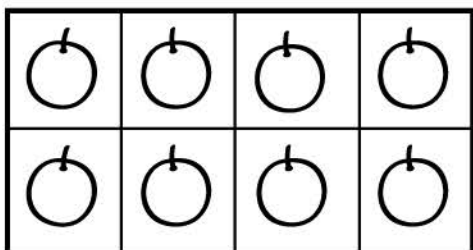
Count the oranges. Use the example to complete the rest of the subtraction problems



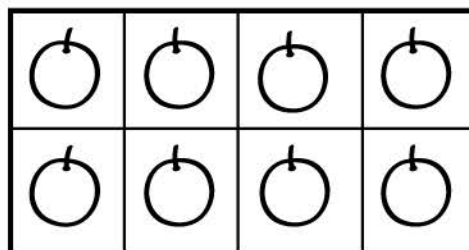
$$6 - 1 = \square$$



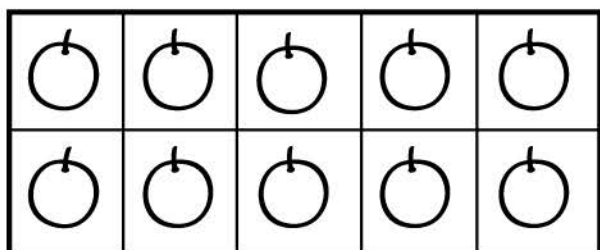
$$6 - 4 = \square$$



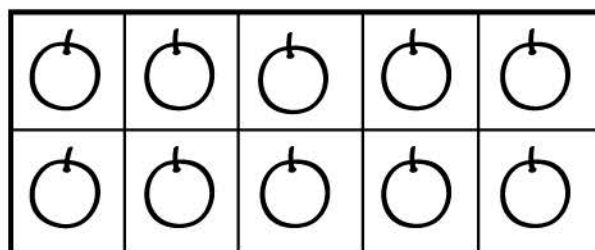
$$8 - 4 = \square$$



$$8 - 3 = \square$$



$$10 - 3 = \square$$



$$10 - 2 = \square$$