

Name \_\_\_\_\_

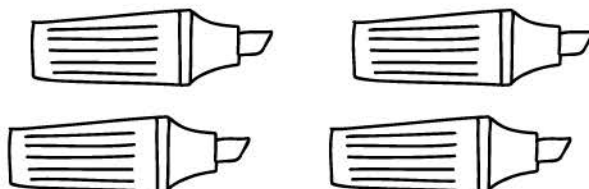


## Take away

Count the items, Cross out the pictures that you take away.  
How many are left?



$$3 - 2 =$$



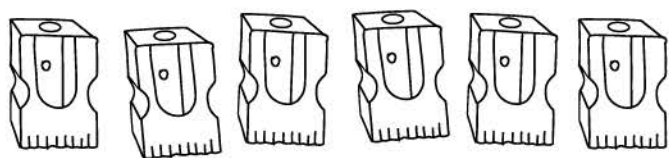
$$4 - 1 =$$




$$4 - 2 =$$



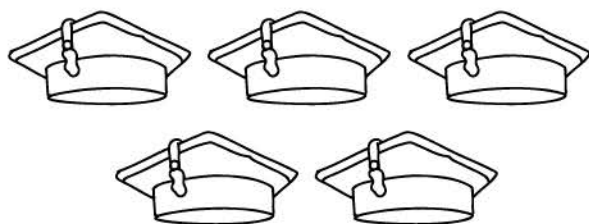
$$5 - 1 =$$




$$6 - 3 =$$



$$7 - 2 =$$



$$5 - 3 =$$



$$3 - 1 =$$