


Name _____




SNOWMAN BUTTON ADDITION


Count the buttons, add and write the sum.




$$\boxed{2} + \boxed{3} = \boxed{}$$



$$\boxed{} + \boxed{} = \boxed{}$$



$$\boxed{} + \boxed{} = \boxed{}$$



$$\boxed{} + \boxed{} = \boxed{}$$